


Identificação:

Fonte: <http://www.ensinobasico.com/1o-ciclo/matematica-2o-ano>

Marca as horas indicadas no relógio:



12:30



07:00



02:15




20 h e 40 m




23 h e 25 m




Meio dia



09 h e 00 m




6 e um quarto



24:07


Identificação:




01:15




09:30




08:55



15 h e 45 m



13 h e 20 m




Meia noite



16 h e 00 m



9 e um quarto



18:17