
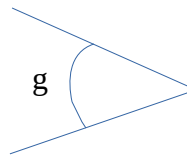
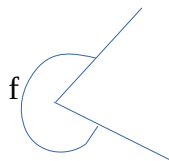
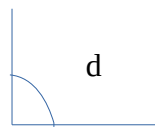
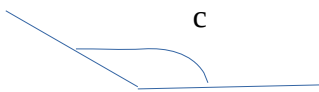

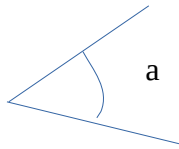


Faz as medições dos seguintes ângulos e preenche a tabela:



Ângulo	Amplitude em graus	Classificação
a		
b		
c		
d		
e		
f		
g		
h		
i		
j		