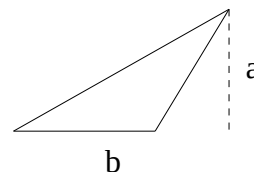
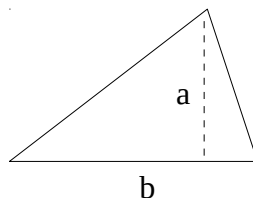
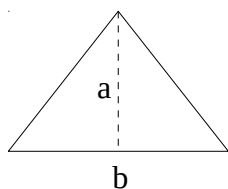
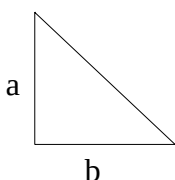


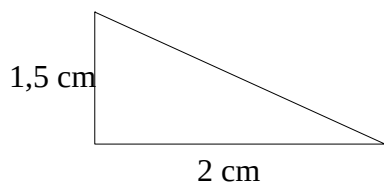
Identificação:

# Área do Triângulo (A):

$$\frac{b \times a}{2}$$



Ex:



$$A = \frac{b \times a}{2} = \frac{2 \times 1,5}{2} = \frac{3}{2} = 1,5$$